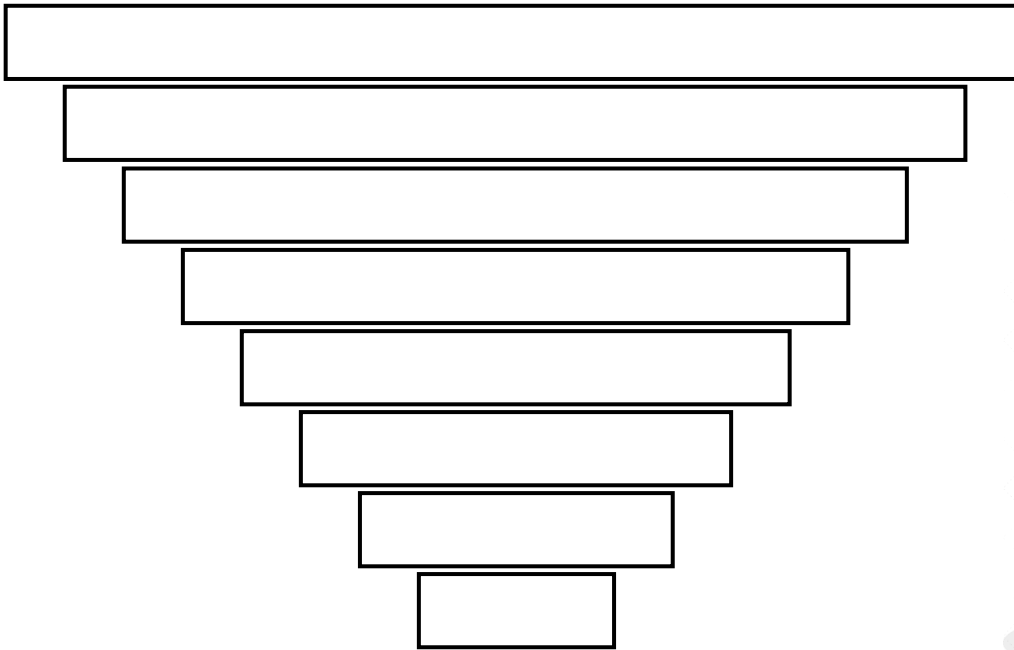


Classifying Living Things



Fill in the chart with the levels of classification:



All living things are made up of one or more _____.

Which organism's cells have a nucleus? (circle one)


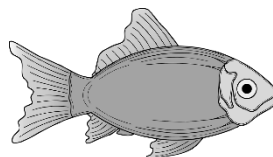

Prokaryotes

Eukaryotes

Both

What is something different between plants and fungi?

Circle the living things that are warm-blooded and put a star next to the living things that are autotrophic:



What is something interesting you learned today?

Choose three living things and classify them from Domain to Species.